

## CONVERSION DU FORMAT 24 HEURES - FICHE 3

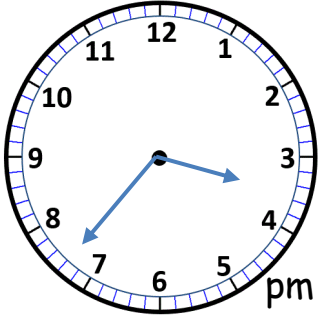
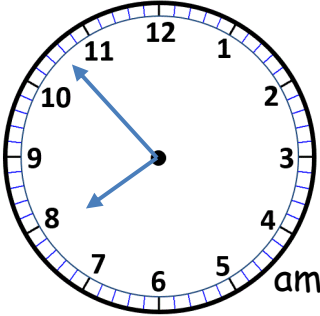
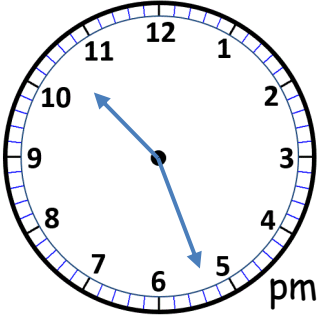
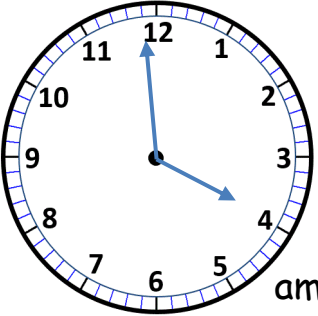
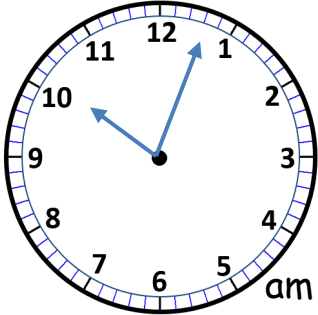
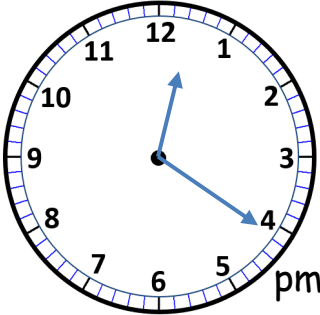
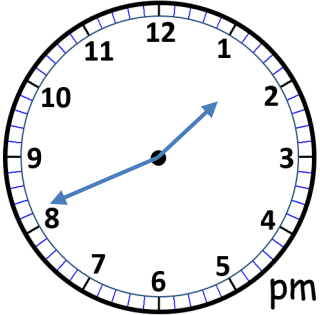
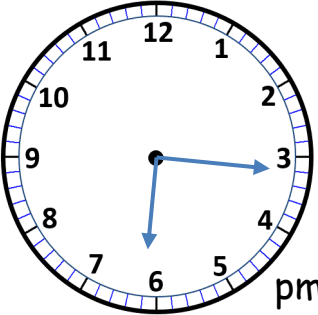
Convertis ces heures am (avant-midi) et pm (après-midi) au format 24 heures :


1)	1:24 pm =	2)	2:56 am =	3)	7:45 pm =
4)	5:16 am =	5)	3:56 pm =	6)	12:25 pm =
7)	11:27 pm =	8)	8:13 pm =	9)	12:42 am =

Convertis ces heures au format 24 heures au format am (avant-midi) et pm (après-midi) :

1)	13:41 =	2)	17:50 =	3)	04:32 =
4)	12:36 =	5)	23:25 =	6)	08:53 =
7)	00:51 =	8)	19:08 =	9)	15:39 =

Écris l'heure suivant le format 24 heures avec chaque horloge analogique.

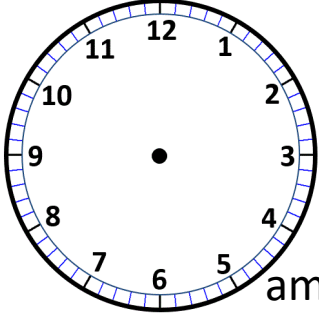


## CONVERSION DU FORMAT 24 HEURES AU FORMAT 12 HEURES - FICHE 2

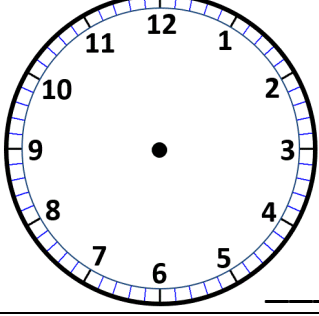
1) Convertis ces 24 heures en heures am (avant-midi) et pm (après-midi).

24 heures	12 heures	24 heures	12 heures
13:25	1:25 pm	18:53	
10:50		22:05	
16:41		07:54	
05:37		00:17	
12:10		02:50	
09:29		21:12	
17:02		23:46	

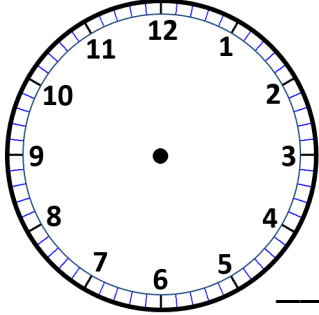
2) Indique l'heure correcte sur les cadrans de l'horloge pour correspondre à l'heure au format 24 heures. Écris « am » (avant-midi) ou « pm » (après-midi) dans le coin inférieur de chaque horloge.



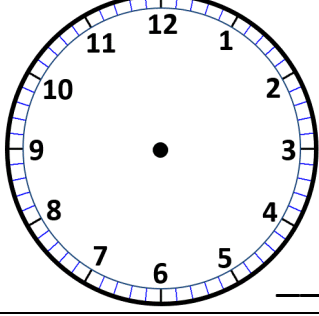
**06:25**



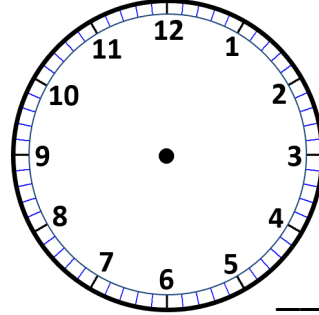
**18:05**



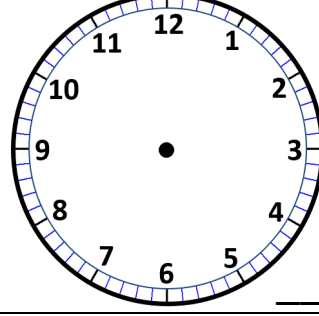
**14:50**



**22:20**



**00:15**



**15:55**

